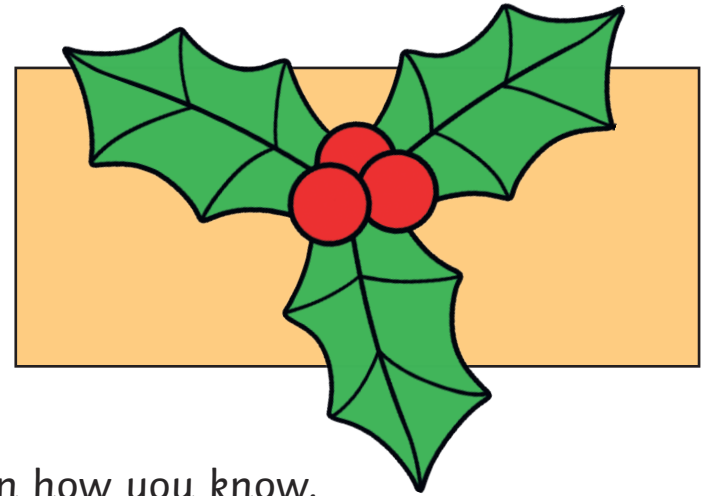




Year 1 Christmas 2D Shape



What shape is hidden by the holly?



Explain how you know.

Year 1 Christmas 2D Shape



How many circles are on the Christmas tree?




Explain how you know.

Year 1 Christmas 2D Shape

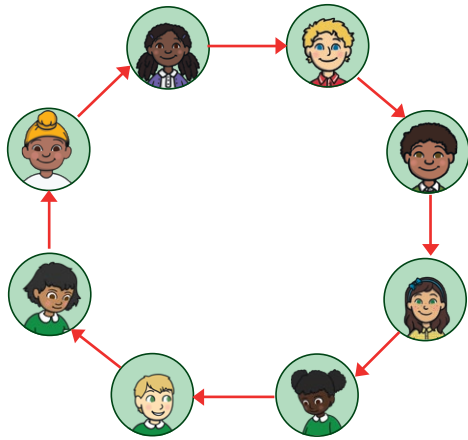


Which present is the odd one out? Explain why.





The children are playing a game. They stand on the spot and throw snowballs to each other.



What shape did they make? How can you tell?



What shape is hidden by the Christmas tree?



Explain how you know.



How many squares can you see on the present?



Explain how you know.




My new bauble has 3 sides and 3 corners. Which bauble is mine? What shape is it?



Which bauble is the odd one out? Explain why

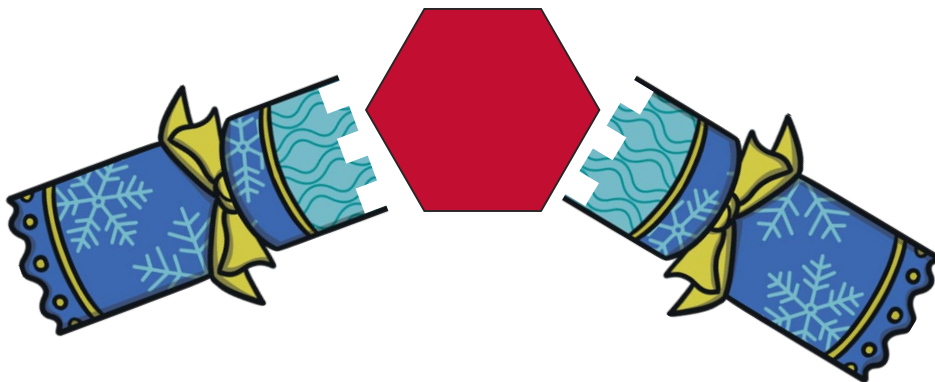


What shape is hidden by the star?



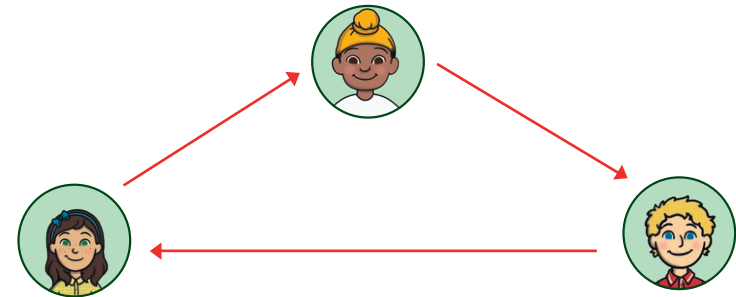
Explain how you know.

What shape is inside the cracker?



Explain how you know.

The children are playing a game. They stand on the spot and throw snowballs to each other.



What shape did they make? How can you tell?

What 2D shapes can you see in the snowman?




What shape is hidden by the holly?



Explain how you know.

The children are playing a game.
They stand on the spot and throw snowballs to each other.



What shape did they make? How can you tell?

Sam's bauble has 6 sides and 6 corners. Which bauble is Sam's? What shape is it?



Year 1 Christmas 2D Shape **Answers** Challenge Cards

Year 1 Christmas 2D Shape

1. **rectangle**
2. **10**
3. **the pentagon because it has 5 sides instead of 4**
4. **octagon**
5. **square**
6. **6**

Year 1 Christmas 2D Shape

7. **the yellow triangle bauble**
8. **the circle bauble has no straight sides or corners**
9. **circle**
10. **hexagon**
11. **triangle**
12. **square, circle, triangle, rectangle**

Year 1 Christmas 2D Shape

13. **pentagon**
14. **square**
15. **the green hexagon bauble**